

ICATS IT

Contest 2017



**TODDLERS
GRADE 1 & 2**



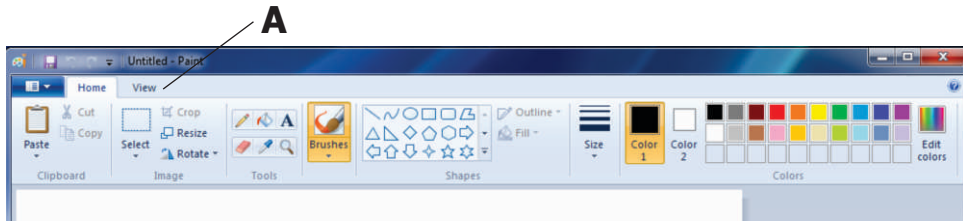
**INTERNATIONAL
CATS CONTESTS**
COMPETENCE & APTITUDE TESTING SERVICES

ICATS IT CONTEST 2017
TODDLERS (GRADE 1 & 2)
TIME ALLOWED : 75 MINUTES
MAXIMUM MARKS : 60
TOTAL QUESTIONS : 20 MCQS

INSTRUCTIONS

1. DON'T START ATTEMPTING THE PAPER UNTIL INSTRUCTED BY THE INVIGILATORS.
2. INSTRUCTIONS FROM THE EXAMINATION INVIGILATORS MUST BE CARRIED OUT PROMPTLY.
3. WRITE YOUR NAME, FATHER NAME, SCHOOL NAME, ADDRESS ETC AT THE BUBBLE SHEET (ANSWERSHEET) ONLY.
4. RECORD ALL ANSWERS ON THE BUBBLE SHEET ONLY. SELECT BEST ANSWER FROM THE FOUR GIVEN OPTIONS AND MARK ONLY ONE OPTION IN EACH QUESTION.
5. USE BLUE / BLACK INK TO FILL UP THE CIRCLES FOR YOUR ANSWERS ON THE BUBBLE SHEET. USE OF LEAD PENCIL IS NOT ALLOWED.
6. USE OF ANY HELPING MATERIAL INCLUDING CELL PHONES AND ELECTRONIC DEVICES IS STRICTLY PROHIBITED.
7. EVERY CORRECT ANSWER EARNS THREE POINTS. THERE WOULD BE NEGATIVE MARKING. ONE POINT WOULD BE DEDUCTED FOR EVERY INCORRECT ANSWER.
8. CANDIDATES MAY NOT LEAVE THE EXAMINATION ROOM UNESCORTED FOR ANY REASON, AND THIS INCLUDES USING THE WASHROOM.
9. NO MATERIALS OR ELECTRONIC DEVICES SHALL BE BROUGHT INTO THE ROOM.
10. THERE ARE FIVE CATEGORIES OF THE CONTEST AS UNDER:
 - A. TODDLERS (GRADE 1 & 2)
 - B. KIDS (GRADE 3 & 4)
 - C. JUNIORS (GRADE 5 & 6)
 - D. JUVENILES (GRADE 7 & 8)
 - E. ADOLESCENTS (GRADE 9 & 10 / O-LEVELS)
11. ONLY REGISTERED STUDENTS CAN PARTICIPATE IN THE CONTEST.
12. NO CANDIDATE SHALL TAKE OUT OF THE HALL ANY ANSWER BOOK(S) OR PART OF AN ANSWER BOOK, WHETHER USED OR UNUSED, OR OTHER SUPPLIED MATERIAL.
13. IF A PARTICIPANT DOES NOT UNDERSTAND A WORD OR PHRASE ON THE EXAM PAPER, NEITHER EXAMINER NOR INVIGILATOR IS PERMITTED TO ANSWER.
14. FOR INFORMATION ABOUT UPCOMING CONTESTS OR PROVIDING VALUABLE FEEDBACK, PLEASE VISIT WWW.CATSCONTESTS.ORG
15. ANY ACADEMIC MISCONDUCT OR MALPRACTICE MUST BE REPORTED TO INTERNATIONAL CATS CONTESTS AT INFO@CATSCONTESTS.ORG

Q1. In the given picture, A represents _____.



A Status Bar

B Menu Bar

C Tool Bar

D Title Bar

Q2. This part of the computer allows you to type information into the computer.

A



B



C



D

None of these

Q3. You must have seen  (slash) symbol in your keyboard. This symbol is used for _____.

A Addition

B Multiplication

C Division

D Subtraction

Q4. Which of the following statement is not correct?

- A** A typical mouse has two or three buttons and sometimes a wheel as well.
- B** When you press and release left button thrice it is known as left click.
- C** When you press and release left button twice quickly it is known as double click.
- D** When you press right button once it is known as right click.


Q5. What is  symbol called?

- A** Dollar
- B** Asterisk
- C** Hash
- D** Ampersand

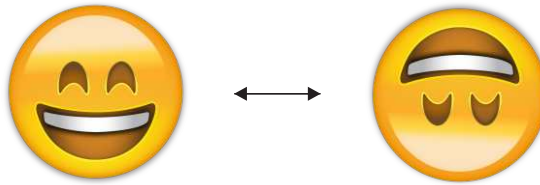
Q6. _____ copies the text and images from papers onto computers.

- A** 
- B** 
- C** 
- D** 

Q7. Which of the following tools would you use to add text to your drawing?

- A** 
- B** 
- C** 
- D** 

Q8. In MS-Paint this can be achieved by using



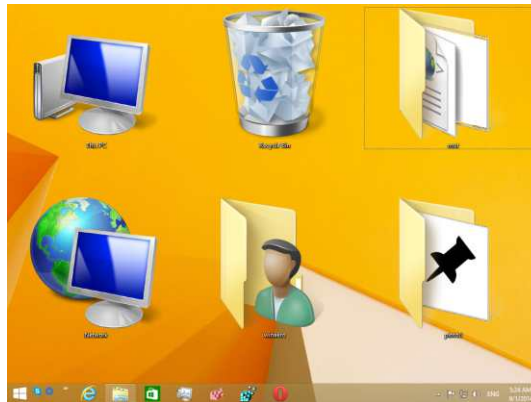
A Flip Horizontal

B Stretch

C Flip Vertical

D Skew

Q9. Small pictures on the desktop are called _____.



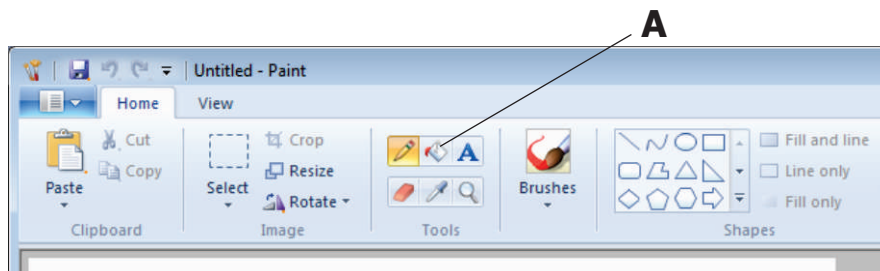
A Icons

B Figures

C Clipart

D Images

Q10. In the below given figure, A represents _____



A Pick color

B Air brush

C Tools

D Fill with color

Q11. Look at the picture given below and complete the sentence



Computers are used at Railway Station to _____.

- A** Book Tickets **B** Listen Music **C** Make a document **D** Play game
-

Q12. CD-ROM stands for

- A** Central processing unit **B** CD-remote open mouse
C CD-resize or minimize **D** CD-read only memory
-

Q13. To change written work already done, what of the following is done?

- A** file **B** edit **C** cut **D** close
-

Q14. A place in the computer system where data and programs are temporarily stored

- A** paste **B** open **C** memory **D** pocket

Q15. To move down a page in a document

A jump

B fly

C wiggle

D scroll

Q16. When used with another key, it performs a special function.

A



B



C



D



Q17. What is the name of THIS removable storage device?



A Compact Disc

B Flash Drive

C 3-1/2" Floppy disk

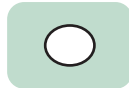
D Hard Drive

Q18. What is the function of this tool in MSPaint?



- A** Applies color to an image like spray paint or air brush.
- B** Allows you to choose different colors to use with tools.
- C** Picks up a color from one area of an image to use with a drawing tool.
- D** Enables you to draw a text box to add typed words to an image.

Q19. What is the function of this tool in MSPaint?



- A** Magnifies or zooms in on an area of an image.
- B** Erases a part of an image.
- C** Draws an oval or an ellipse in an image.
- D** Fills an area with color.

Q20. What is the function of this tool in MSPaint?



- A** Draws the free form line with different widths and fuzzy edges.
- B** Draws a rectangle in an image.
- C** Draws a thin free form line. Used to draw objects just as you would with a pencil.
- D** Allows you to choose different colors to use with tools.

