

# ICATS IT

Contest 2017



**KIDS  
GRADE 3 & 4**



**INTERNATIONAL  
CATS CONTESTS**  
COMPETENCE & APTITUDE TESTING SERVICES

# **ICATS IT CONTEST 2017**

## **KIDS (GRADE 3 & 4)**

**TIME ALLOWED : 75 MINUTES**

**MAXIMUM MARKS : 75**

**TOTAL QUESTIONS : 25 MCQS**

### **INSTRUCTIONS**

1. DON'T START ATTEMPTING THE PAPER UNTIL INSTRUCTED BY THE INVIGILATORS.
2. INSTRUCTIONS FROM THE EXAMINATION INVIGILATORS MUST BE CARRIED OUT PROMPTLY.
3. WRITE YOUR NAME, FATHER NAME, SCHOOL NAME, ADDRESS ETC AT THE BUBBLE SHEET (ANSWERSHEET) ONLY.
4. RECORD ALL ANSWERS ON THE BUBBLE SHEET ONLY. SELECT BEST ANSWER FROM THE FOUR GIVEN OPTIONS AND MARK ONLY ONE OPTION IN EACH QUESTION.
5. USE BLUE / BLACK INK TO FILL UP THE CIRCLES FOR YOUR ANSWERS ON THE BUBBLE SHEET. USE OF LEAD PENCIL IS NOT ALLOWED.
6. USE OF ANY HELPING MATERIAL INCLUDING CELL PHONES AND ELECTRONIC DEVICES IS STRICTLY PROHIBITED.
7. EVERY CORRECT ANSWER EARNS THREE POINTS. THERE WOULD BE NEGATIVE MARKING. ONE POINT WOULD BE DEDUCTED FOR EVERY INCORRECT ANSWER.
8. CANDIDATES MAY NOT LEAVE THE EXAMINATION ROOM UNESCORTED FOR ANY REASON, AND THIS INCLUDES USING THE WASHROOM.
9. NO MATERIALS OR ELECTRONIC DEVICES SHALL BE BROUGHT INTO THE ROOM.
10. THERE ARE FIVE CATEGORIES OF THE CONTEST AS UNDER:
  - A. TODDLERS (GRADE 1 & 2)
  - B. KIDS (GRADE 3 & 4)
  - C. JUNIORS (GRADE 5 & 6)
  - D. JUVENILES (GRADE 7 & 8)
  - E. ADOLESCENTS (GRADE 9 & 10 / O-LEVELS)
11. ONLY REGISTERED STUDENTS CAN PARTICIPATE IN THE CONTEST.
12. NO CANDIDATE SHALL TAKE OUT OF THE HALL ANY ANSWER BOOK(S) OR PART OF AN ANSWER BOOK, WHETHER USED OR UNUSED, OR OTHER SUPPLIED MATERIAL.
13. IF A PARTICIPANT DOES NOT UNDERSTAND A WORD OR PHRASE ON THE EXAM PAPER, NEITHER EXAMINER NOR INVIGILATOR IS PERMITTED TO ANSWER.
14. FOR INFORMATION ABOUT UPCOMING CONTESTS OR PROVIDING VALUABLE FEEDBACK, PLEASE VISIT [WWW.CATSCONTESTS.ORG](http://WWW.CATSCONTESTS.ORG)
15. ANY ACADEMIC MISCONDUCT OR MALPRACTICE MUST BE REPORTED TO INTERNATIONAL CATS CONTESTS AT [INFO@CATSCONTESTS.ORG](mailto:INFO@CATSCONTESTS.ORG)

**Q1.** The main functions of an operating system are process management, \_\_\_\_\_, secondary storage management and device management.

**A** Information Management

**B** Data Management

**C** Software Management

**D** Memory Management

---

**Q2.** The storage device, in which user cannot write or erase anything.

**A**



**B**



**C**



**D**

Question does not provide sufficient data or is vague

---

**Q3.** Portrait and Landscape are

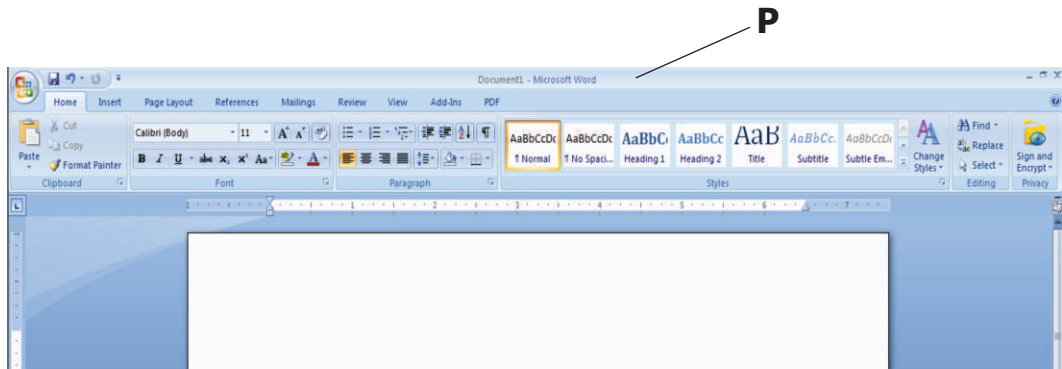
**A** Page Orientation

**B** Paper Size

**C** Page Layout

**D** All of above

**Q4.** In the given picture, P represents \_\_\_\_\_.




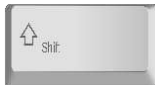

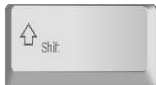



- A** Title Bar      **B** Status Bar      **C** Menu Bar      **D** Tool Bar

**Q5.** Which one of the following statements is correct?

- A** 1 Byte = 8 Bits = 2 Nibbles      **B** 1 MB = 1024 KB = 1048576 Bytes  
**C** All of these      **D** None of these

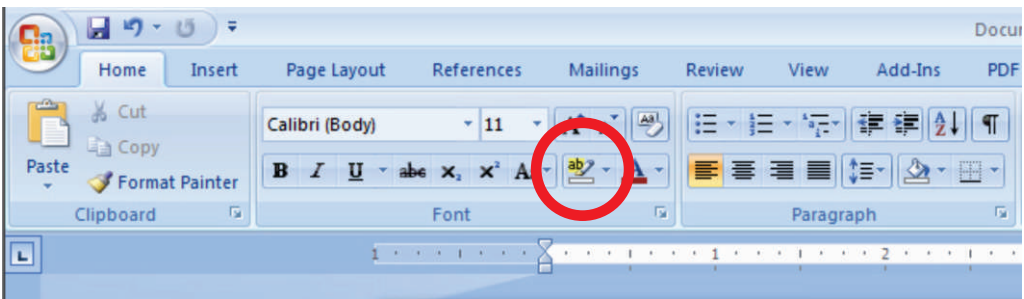
**Q6.** Which of the following is true?

- A**  +  = **0**      **B**  +  = **7**  
**C**  +  = **5**      **D**  +  = **%**

**Q7.** Which of the following button will be clicked to go to pages that are already visited on a browser?



- A**  **B**  **C**  **D** 

**Q8.** What is the name of the component circled in red?

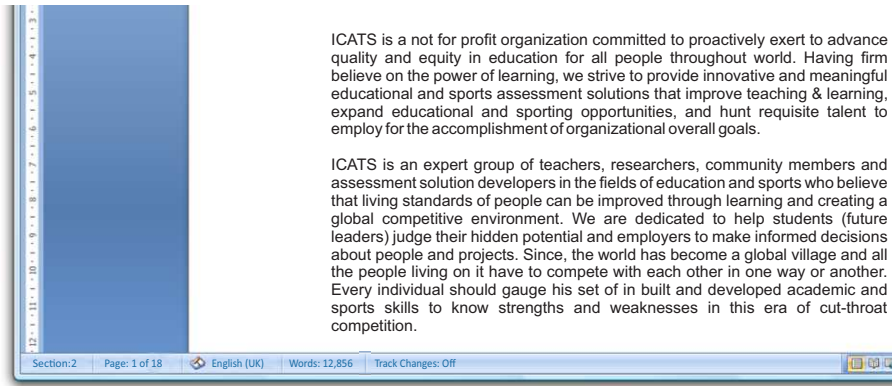


- A** Font Face **B** Change Case **C** Font Color **D** Text Highlight Color

**Q9.** Which of the following is not a special key?

- A**  **B** 
- C**  **D** 

**Q10.** Study the image of a Word screen below this question. Which of the following statements is NOT true about the document pictured?



- A** The document contains 12,856 words.
- B** The cursor is currently positioned on page 2 of the document.
- C** There are 18 pages in the document in total.
- D** All of the above are correct.

**Q11.** Which shortcut will clear the image made in MS-Paint?

- A** Ctrl + R
- B** Ctrl + Shift + N
- C** Ctrl + W
- D** Ctrl + I

**Q12.** The ability to combine name and addresses in MSEXCEL with a standard document in MSWORD is called \_\_\_\_\_

- A** document formatting
- B** database management
- C** mail merge
- D** form letters

**Q13.** What is gutter margin?

- A** Margin that is added to the left margin when printing
  - B** Margin that is added to right margin when printing
  - C** Margin that is added to the binding side of page when printing
  - D** Margin that is added to the outside of the page when printing
- 

**Q14.** In MS-word, which symbol is used to create a bulleted list?



**Q15.** In MS-word, which symbol is used to provide text effects on selected part of document?



**Q16.** Which feature helps you to insert the contents of the Clipboard as text without any formatting

**A** Paste Special

**B** Format Painter

**C** Page Setup

**D** Styles

**Q17.** Who is the creator of the PASCAL language?

**A** Niklaus Wirth

**B** Dijkstra

**C** Donald Knuth

**D** Basic Pascal

**Q18.** To select adjacent files or folders, hold down the ..... key and Click the desired items.

**A** Ctrl




**B** Alt



**C**



**D**



**Q19.** The shortcut key to check spelling and grammar errors in a selected text is

**A** F2



**B** F6



**C** F7



**D** F9



**Q20.** Tuan found a small drawing in a magazine that he wanted to use as a full-size cover for a report. Using the computer, how might he do this?

**A** Scan the picture, resize, print

**B** Print the report and glue the picture

**A** Save the report and load the picture

**B** Load the report, add clip art, print



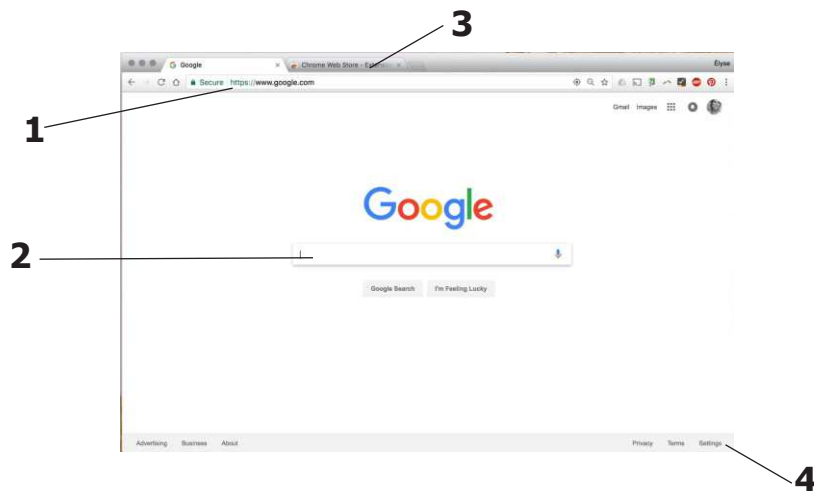
**Q21.** Why is a web site an effective way to present a report on an animal that you are studying?

- A** People like to read reports on computers.
- B** People can follow links to additional information, pictures, or animal sounds.
- C** People do not have to read the report; they can just look at the pictures and listen to the sounds.
- D** People can read a long report on one page by scrolling down so they do not have to go to another web page.

**Q22.** What are the 3 most important parts of a MICROPROCESSOR?

- A** Microchip, Heat Sink, Fan
- B** Fan, Power Port, Battery
- C** Heat Sink, Kitchen Sink, Ice Cream
- D** Heat Sink, Fan, ICU

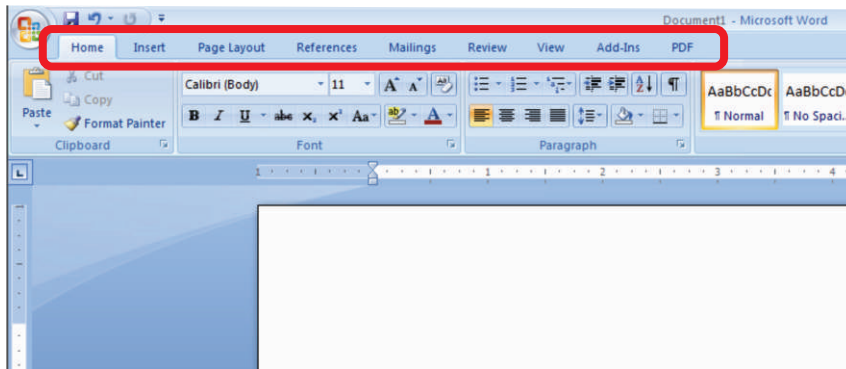
**Q23.**



In the above window, the web address is indicated by number-


- A** 1
- B** 2
- C** 3
- D** 4

**Q24.** What is the correct name for the words/labels circled in red in the image below?



- A** The Ribbon Names.  
**B** The Quick Access Toolbar.  
**C** The Ribbon Tabs.  
**D** None of the above options are correct.

**Q25.** The horizontal and vertical margins have disappeared on your document. Which of the following is a possible solution?



- A** Close the Word document and reopen it again.  
**B** Click on the View Ruler button located at the top of the vertical scroll bar on the right-hand side of the screen.  
**C** Double click in the ruler area to re-display the ruler.  
**D** Click on the View Ruler button located at the top left hand side of the screen that looks like an L