




INTERNATIONAL CATS CONTESTS

COMPETENCE & APTITUDE TESTING SERVICES



**GRADE 1 & 2
TODDLERS**

*Time Allowed: 75 Mins.
Maximum Marks: 60*



ICATS IT
CONTEST 2018
QUESTION BOOKLET

ICATS IT CONTEST 2018

TODDLERS (GRADE 1 & 2)

TIME ALLOWED : 75 MINUTES, MAXIMUM MARKS : 60

TOTAL QUESTIONS : 20 MCQS

INSTRUCTIONS

1. DON'T START ATTEMPTING THE PAPER UNTIL INSTRUCTED BY THE INVIGILATORS.
2. INSTRUCTIONS FROM THE EXAMINATION INVIGILATOR MUST BE CARRIED OUT PROMPTLY.
3. CAREFULLY RECHECK YOUR NAME, FATHER NAME, SCHOOL NAME, ADDRESS ETC AT THE BUBBLE SHEET / ANSWER SHEET.
4. RECORD ALL ANSWERS ON THE BUBBLE SHEET ONLY. SELECT BEST ANSWER FROM THE FOUR GIVEN OPTIONS AND MARK ONLY ONE OPTION IN EACH QUESTION.
5. USE BLUE / BLACK INK TO FILL UP THE CIRCLES FOR YOUR ANSWERS ON THE BUBBLE SHEET. USE OF LEAD PENCIL IS NOT ALLOWED.
6. USE OF ANY HELPING MATERIAL INCLUDING CELL PHONES AND ELECTRONIC DEVICES IS STRICTLY PROHIBITED.
7. EVERY CORRECT ANSWER EARNS THREE POINTS. THERE WOULD BE NEGATIVE MARKING. ONE POINT WOULD BE DEDUCTED FOR EVERY INCORRECT ANSWER.
8. CANDIDATES MAY NOT LEAVE THE EXAMINATION ROOM UNESCORTED FOR ANY REASON, AND THIS INCLUDES USING THE WASHROOM.
9. NO MATERIALS OR ELECTRONIC DEVICES SHALL BE BROUGHT INTO THE ROOM.
10. THERE ARE FIVE CATEGORIES OF THE CONTEST AS UNDER:
 - A. TODDLERS (GRADE 1-2)
 - B. KIDS (GRADE 3-4)
 - C. JUNIORS (GRADE 5-6)
 - D. JUVENILES (GRADE 7-8)
 - E. ADOLESCENTS (GRADE 9-10 / O-LEVELS)
11. ONLY REGISTERED STUDENTS CAN PARTICIPATE IN THE CONTEST.
12. NO CANDIDATE SHALL TAKE OUT OF THE HALL ANY ANSWER BOOK(S) OR PART OF AN ANSWER BOOK, WHETHER USED OR UNUSED, OR OTHER SUPPLIED MATERIAL.
13. IF A PARTICIPANT DOES NOT UNDERSTAND A WORD OR PHRASE ON THE EXAM PAPER, NEITHER EXAMINER NOR INVIGILATOR IS PERMITTED TO ANSWER.
14. FOR INFORMATION ABOUT UPCOMING CONTESTS OR PROVIDING VALUABLE FEEDBACK, PLEASE VISIT WWW.CATSCONTESTS.ORG
15. ANY ACADEMIC MISCONDUCT OR MALPRACTICE MUST BE REPORTED TO INTERNATIONAL CATS CONTESTS AT INFO@CATSCONTESTS.ORG

Q1. Which of the following activities we can do on a computer?

A



B



C



D



Q2. How many objects of the following are machines?



A 1

B 2

C 3

D 4

Q3. How many windows can you see open?



A 1

B 2

C 3

D 4

Q4. What kind of computer is usually kept at one place because it is very heavy

A



Laptop

B



Desktop

C



Mobile

D



Washing Machine

Q5. Which of the following is a part of a computer?

A Monitor

B Paper

C Bag

D Eraser


Q6. Which place you would most like to visit online?



Jungle



Outer space



Ocean

A Jungle

B Outer space

C Ocean

D All of them

Q7. What type of device is this?



A Input

B Storage

C Output

D None of them

Q8. What is the name of THIS removable storage device?



- A** Compact Disc **B** Flash drive **C** 3-1/2" Floppy disk **D** Hard Drive


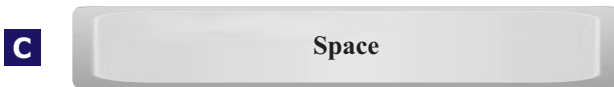

Look at the picture given below and answer questions 9 through 12.



Q9. What other letters are in the same row as YUIOP?

- A** QWERT **B** ZXCVBNM **C** ASDFG **D** HJKL

Q10. Which key deletes the text towards left?



Q11. Which is the longest key on the keyboard?

A Enter key

B Tab key

C Space bar

D Backspace key

Q12. Home key in the key board is used to

A Go home

B Go to beginning

C Go out

D Go to end

Q13. What is the proper way to shut down a computer?

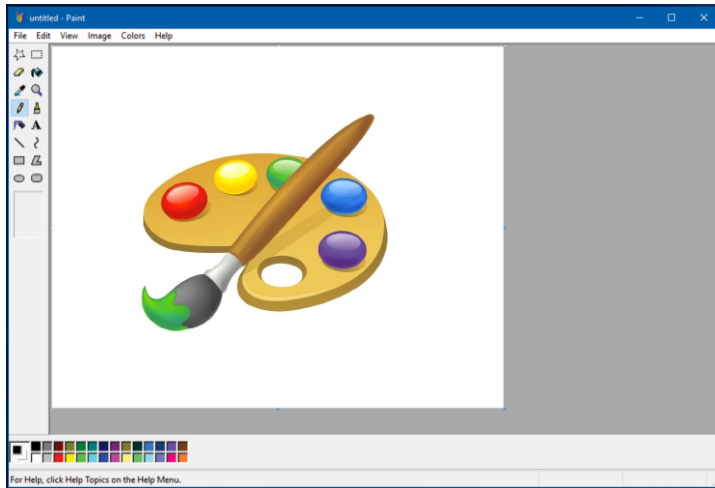
A Click on START button and press shutdown

B Switch of power supply directly

C Remove the power cable

D Any of the above

Look at the picture given below and answer the questions 14 through 17.



Q14. Which of the toolbox will you use to erase the above picture in MS-Paint?

A Free-Form

B Eraser

C Magnifier

D Brush

Q15. Which tool will you use to fill the entire picture or an enclosed shape with color?

A Airbrush

B Fill With Color

C Pencil

D Color box

Q16. Which tool should be used to select an object and move it?

A 

B 

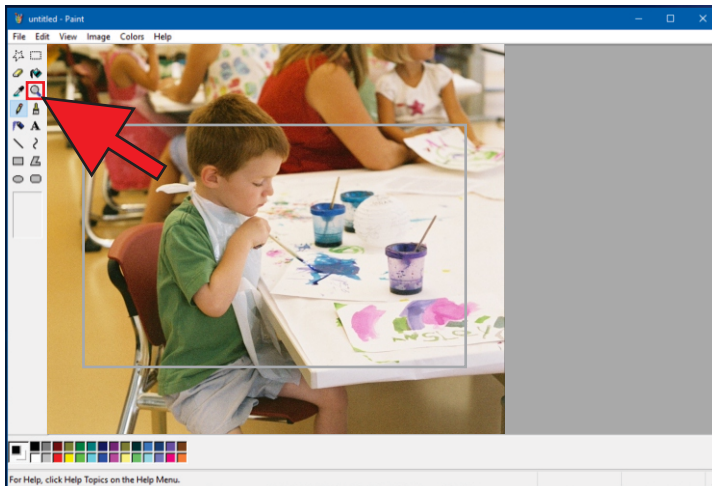
C 

D 

Q17. Which tool would be used to select a portion of the image?



Q18. To zoom in on a section of your picture, you should use the tool marked in red square. What is that tool called?



A Magnifier

B Free-Form

C Brush

D Eraser

Q19. In Ms-Paint, which of the following tools will you use to write "Bad Hare Day" in the picture?

A Pencil

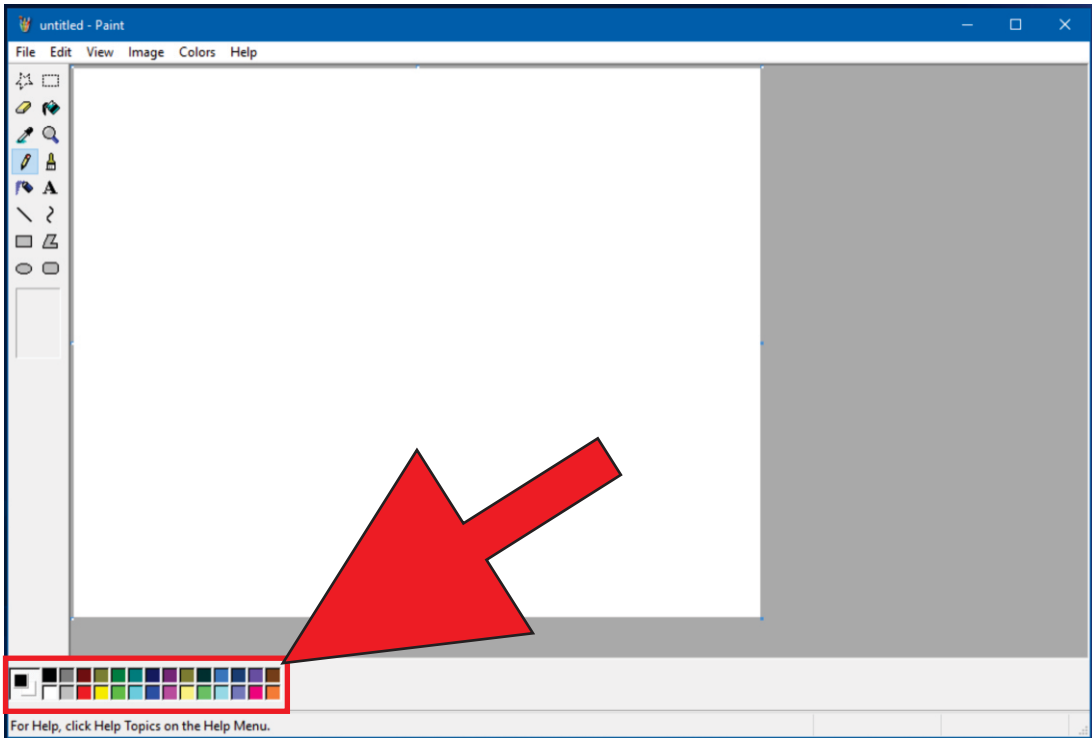
B Text box

C Brush

D Airbrush



Q20. In MS-Paint, what the menu in red square is called:



A Fill with Color

B Color Palette

C Brush

D Airbrush

ICATS English Linguistics Contest 2018 National Toppers

Student Name	Father Name	Grade	School	City
FIMAAN TASSADDUQUE	ROSHAAN TASSADDUQUE	1	KOHINOOR GRAMMAR SCHOOL	FAISALABAD
MUSA NOOR	NOOR NABI	1	FOUNDATION MONTESSORI SCHOOL	BAHAWALPUR
ZAINA KHAN	MUNAWAR AHMED	1	BEACONHOUSE SCHOOL SYSTEM (BKI F-7/4)	ISLAMABAD
MALIK-AL-ASHTER	KHAN MURTAZA	2	MSB INSTITUTE-SHABBIRABAD	KARACHI
JAWAD ALI	MUHAMMAD ASSAD	2	JOINT STAFF PUBLIC SCHOOL AND COLLEGE CHAKLALA	RAWALPINDI
M. ASAD HUSSAIN	SYED M. ASIF HUSSAIN	2	USMAN PUBLIC SCHOOL SYSTEM (CAMPUS XVI)	KARACHI
HIJAB FATIMA	IRFAN QADIR	3	BEACONHOUSE ALLAMA IQBAL TOWN CAMPUS	LAHORE
ZAINEB NADEEM	NADEEM AFZAL	4	KOHSAR CHILDREN'S ACADEMY	MANSEHRA
MARIA FAISAL	FAISAL SALEEM	5	THE CITY SCHOOL GIRLS BRANCH SATELLITE TOWN	RAWALPINDI
IBRAHIM SALMAN	SALMAN RASOOL	6	LAHORE GRAMMAR SCHOOL FAISAL TOWN BRANCH	LAHORE
KHADIJA IMRAN	IMRAN MAGRANI	7	D. A PUBLIC SCHOOL (O/A LEVELS) SEAVIEW	KARACHI
LAIBA MASOOD	MASOOD ABBAS	8	USMAN PUBLIC SCHOOL SYSTEM (CAMPUS 1)	KARACHI
EMAAN IFTIKHAR	IFTIKHAR AHMAD	9	BEACONHOUSE SCHOOL SYSTEM PTC GIRLS BRANCH	GUJRANWALA
AYESHA NADEEM	MUHAMMAD NADEEM	10	USMAN PUBLIC SCHOOL SYSTEM (CAMPUS VIII)	KARACHI

ICATS Mathematics Contest 2018 National Toppers

Student Name	Father Name	Grade	School	City
AMAN ALI AHMAD	MUHAMMAD WASIM	1	LAHORE GRAMMAR SCHOOL (LANDMARK PROJECT)	LAHORE
MIAN AZAAN MAQBOOL	DANISH MAQBOOL	2	ARMY PUBLIC SCHOOL GARRISON JUNIOR	LAHORE
SHAHEER AFZAL	JAVED AFZAL MARWAT	3	ARMY PUBLIC SCHOOL (TODDLERS ACADEMY)	PESHAWAR
MUHAMMAD AHMED	ASMAT ALI	4	ARMY BURN HALL SCHOOL AND COLLEGE (FOR GIRLS)	ABBOTTABAD
M. MURTAZA ZAIDI	BABER ALI	5	BEACONHOUSE ALLAMA IQBAL TOWN CAMPUS	LAHORE
RAJA SAAD ALI	RAJA AAMIR	6	HITEC SCHOOL & COLLEGE FOR BOYS CANTT	TAXILA
ZAID BIN HAROON	M. HAROON RAFIQUE	7	THE SCIENCE SCHOOL	RAWALPINDI
WALEED AHMED	M. ATIQ	8	KIPS SENIOR BOYS CAMPUS JOHAR TOWN	LAHORE
M. RAYAN ABID	M. ABID MUNEEER	9	SIR SYED SCHOOL AND COLLEGE (CAMPUS IV)	WAH CANTT
IMTIAZ KHAN	DADA KHAN	10	AGA KHAN HIGHER SECONDARY SCHOOL	GILGIT

Compete
if you are the best