

*Compete if you are
the best*

Past Papers
ICATS IT CONTEST
Grade 1-2
2017-2019



INTERNATIONAL
CATS CONTESTS
COMPETENCE & APTITUDE TESTING SERVICES
FASTEST GROWING CONTESTS IN PAKISTAN

ICATS IT

Contest 2017



**TODDLERS
GRADE 1 & 2**



INTERNATIONAL
CATS CONTESTS
COMPETENCE & APTITUDE TESTING SERVICES

ICATS IT CONTEST 2017
TODDLERS (GRADE 1 & 2)
TIME ALLOWED : 75 MINUTES
MAXIMUM MARKS : 60
TOTAL QUESTIONS : 20 MCQS

INSTRUCTIONS

1. DON'T START ATTEMPTING THE PAPER UNTIL INSTRUCTED BY THE INVIGILATORS.
2. INSTRUCTIONS FROM THE EXAMINATION INVIGILATORS MUST BE CARRIED OUT PROMPTLY.
3. WRITE YOUR NAME, FATHER NAME, SCHOOL NAME, ADDRESS ETC AT THE BUBBLE SHEET (ANSWER SHEET) ONLY.
4. RECORD ALL ANSWERS ON THE BUBBLE SHEET ONLY. SELECT BEST ANSWER FROM THE FOUR GIVEN OPTIONS AND MARK ONLY ONE OPTION IN EACH QUESTION.
5. USE BLUE / BLACK INK TO FILL UP THE CIRCLES FOR YOUR ANSWERS ON THE BUBBLE SHEET. USE OF LEAD PENCIL IS NOT ALLOWED.
6. USE OF ANY HELPING MATERIAL INCLUDING CELL PHONES AND ELECTRONIC DEVICES IS STRICTLY PROHIBITED.
7. EVERY CORRECT ANSWER EARNS THREE POINTS. THERE WOULD BE NEGATIVE MARKING. ONE POINT WOULD BE DEDUCTED FOR EVERY INCORRECT ANSWER.
8. CANDIDATES MAY NOT LEAVE THE EXAMINATION ROOM UNESCORTED FOR ANY REASON, AND THIS INCLUDES USING THE WASHROOM.
9. NO MATERIALS OR ELECTRONIC DEVICES SHALL BE BROUGHT INTO THE ROOM.
10. THERE ARE FIVE CATEGORIES OF THE CONTEST AS UNDER:
 - A. TODDLERS (GRADE 1 & 2)
 - B. KIDS (GRADE 3 & 4)
 - C. JUNIORS (GRADE 5 & 6)
 - D. JUVENILES (GRADE 7 & 8)
 - E. ADOLESCENTS (GRADE 9 & 10 / O-LEVELS)
11. ONLY REGISTERED STUDENTS CAN PARTICIPATE IN THE CONTEST.
12. NO CANDIDATE SHALL TAKE OUT OF THE HALL ANY ANSWER BOOK(S) OR PART OF AN ANSWER BOOK, WHETHER USED OR UNUSED, OR OTHER SUPPLIED MATERIAL.
13. IF A PARTICIPANT DOES NOT UNDERSTAND A WORD OR PHRASE ON THE EXAM PAPER, NEITHER EXAMINER NOR INVIGILATOR IS PERMITTED TO ANSWER.
14. FOR INFORMATION ABOUT UPCOMING CONTESTS OR PROVIDING VALUABLE FEEDBACK, PLEASE VISIT WWW.CATSCONTESTS.ORG
15. ANY ACADEMIC MISCONDUCT OR MALPRACTICE MUST BE REPORTED TO INTERNATIONAL CATS CONTESTS AT INFO@CATSCONTESTS.ORG

Q1. In the given picture, A represents _____.



A Status Bar

B Menu Bar

C Tool Bar

D Title Bar

Q2. This part of the computer allows you to type information into the computer.

A



B



C



D None of these

Q3. You must have seen  (slash) symbol in your keyboard. This symbol is used for _____.

A Addition

B Multiplication

C Division

D Subtraction

Q4. Which of the following statement is not correct?

- A** A typical mouse has two or three buttons and sometimes a wheel as well.
 - B** When you press and release left button thrice it is known as left click.
 - C** When you press and release left button twice quickly it is known as double click.
 - D** When you press right button once it is known as right click.
-

Q5. What is  symbol called?

- A** Dollar
 - B** Asterisk
 - C** Hash
 - D** Ampersand
-

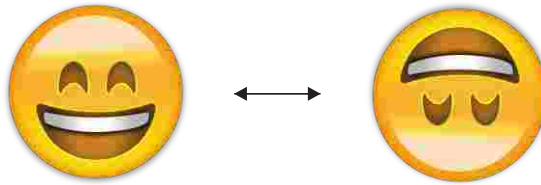
Q6. _____ copies the text and images from papers onto computers.



Q7. Which of the following tools would you use to add text to your drawing?



Q8. In MS-Paint this can be achieved by using



A Flip Horizontal

B Stretch

C Flip Vertical

D Skew

Q9. Small pictures on the desktop are called _____.



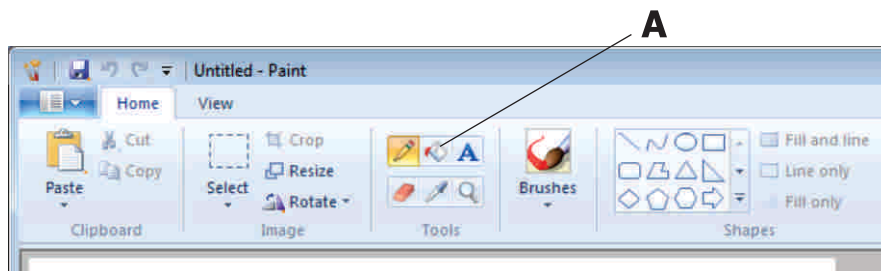
A Icons

B Figures

C Clipart

D Images

Q10. In the below given figure, A represents _____



A Pick color

B Air brush

C Tools

D Fill with color

Q11. Look at the picture given below and complete the sentence



Computers are used at Railway Station to _____.

- A** Book Tickets **B** Listen Music **C** Make a document **D** Play game
-

Q12. CD-ROM stands for

- A** Central processing unit **B** CD-remote open mouse
C CD-resize or minimize **D** CD-read only memory
-

Q13. To change written work already done, what of the following is done?

- A** file **B** edit **C** cut **D** close
-

Q14. A place in the computer system where data and programs are temporarily stored

- A** paste **B** open **C** memory **D** pocket

Q15. To move down a page in a document

A jump

B fly

C wiggle


D scroll

Q16. When used with another key, it performs a special function.

A



B



C



D



Q17. What is the name of THIS removable storage device?



A Compact Disc

B Flash Drive

C 3-1/2" Floppy disk

D Hard Drive

Q18. What is the function of this tool in MSPaint?



- A** Applies color to an image like spray paint or air brush.
- B** Allows you to choose different colors to use with tools.
- C** Picks up a color from one area of an image to use with a drawing tool.
- D** Enables you to draw a text box to add typed words to an image.

Q19. What is the function of this tool in MSPaint?



- A** Magnifies or zooms in on an area of an image.
- B** Erases a part of an image.
- C** Draws an oval or an ellipse in an image.
- D** Fills an area with color.

Q20. What is the function of this tool in MSPaint?



- A** Draws the free form line with different widths and fuzzy edges.
- B** Draws a rectangle in an image.
- C** Draws a thin free form line. Used to draw objects just as you would with a pencil.
- D** Allows you to choose different colors to use with tools.



INSTRUCTIONS

- This is a generic answer sheet to be used by participants of all grades. Students of Grade 1-2 will fill in circles of first 20 questions, Grade 3-4 will fill in circles of 25 questions and Grade 5-10 will fill in circles of 30 questions.
- Please recheck your Name, Father Name, Grade and School written below, the same would appear at your certificate.
- Use of lead pencil is not allowed.
- Use only Black / Blue ink to fill in the circles.

ICATS IT Contest 2017 Grade 1-2

Choose only ONE of the FOUR proposed answers (A, B, C or D) and fill in the circle with your answer.

Example of correctly filled table of answers.



Q. No. Answer

- | | |
|----|-----------------|
| 1 | (A) (B) (C) (D) |
| 2 | (A) (B) (C) (D) |
| 3 | (A) (B) (C) (D) |
| 4 | (A) (B) (C) (D) |
| 5 | (A) (B) (C) (D) |
| 6 | (A) (B) (C) (D) |
| 7 | (A) (B) (C) (D) |
| 8 | (A) (B) (C) (D) |
| 9 | (A) (B) (C) (D) |
| 10 | (A) (B) (C) (D) |

Q. No. Answer

- | | |
|----|-----------------|
| 11 | (A) (B) (C) (D) |
| 12 | (A) (B) (C) (D) |
| 13 | (A) (B) (C) (D) |
| 14 | (A) (B) (C) (D) |
| 15 | (A) (B) (C) (D) |
| 16 | (A) (B) (C) (D) |
| 17 | (A) (B) (C) (D) |
| 18 | (A) (B) (C) (D) |
| 19 | (A) (B) (C) (D) |
| 20 | (A) (B) (C) (D) |

Q. No. Answer

- | | |
|----|-----------------|
| 21 | (A) (B) (C) (D) |
| 22 | (A) (B) (C) (D) |
| 23 | (A) (B) (C) (D) |
| 24 | (A) (B) (C) (D) |
| 25 | (A) (B) (C) (D) |
| 26 | (A) (B) (C) (D) |
| 27 | (A) (B) (C) (D) |
| 28 | (A) (B) (C) (D) |
| 29 | (A) (B) (C) (D) |
| 30 | (A) (B) (C) (D) |



INTERNATIONAL
CATS CONTESTS
COMPETENCE & APTITUDE TESTING SERVICES



**GRADE 1 & 2
TODDLERS**

*Time Allowed: 75 Mins.
Maximum Marks: 60*



ICATS IT
CONTEST 2018
QUESTION BOOKLET

ICATS IT CONTEST 2018

TODDLERS (GRADE 1 & 2)

TIME ALLOWED : 75 MINUTES, MAXIMUM MARKS : 60

TOTAL QUESTIONS : 20 MCQS

INSTRUCTIONS

1. DON'T START ATTEMPTING THE PAPER UNTIL INSTRUCTED BY THE INVIGILATORS.
2. INSTRUCTIONS FROM THE EXAMINATION INVIGILATOR MUST BE CARRIED OUT PROMPTLY.
3. CAREFULLY RECHECK YOUR NAME, FATHER NAME, SCHOOL NAME, ADDRESS ETC AT THE BUBBLE SHEET / ANSWER SHEET.
4. RECORD ALL ANSWERS ON THE BUBBLE SHEET ONLY. SELECT BEST ANSWER FROM THE FOUR GIVEN OPTIONS AND MARK ONLY ONE OPTION IN EACH QUESTION.
5. USE BLUE / BLACK INK TO FILL UP THE CIRCLES FOR YOUR ANSWERS ON THE BUBBLE SHEET. USE OF LEAD PENCIL IS NOT ALLOWED.
6. USE OF ANY HELPING MATERIAL INCLUDING CELL PHONES AND ELECTRONIC DEVICES IS STRICTLY PROHIBITED.
7. EVERY CORRECT ANSWER EARNS THREE POINTS. THERE WOULD BE NEGATIVE MARKING. ONE POINT WOULD BE DEDUCTED FOR EVERY INCORRECT ANSWER.
8. CANDIDATES MAY NOT LEAVE THE EXAMINATION ROOM UNESCORTED FOR ANY REASON, AND THIS INCLUDES USING THE WASHROOM.
9. NO MATERIALS OR ELECTRONIC DEVICES SHALL BE BROUGHT INTO THE ROOM.
10. THERE ARE FIVE CATEGORIES OF THE CONTEST AS UNDER:
 - A. TODDLERS (GRADE 1-2)
 - B. KIDS (GRADE 3-4)
 - C. JUNIORS (GRADE 5-6)
 - D. JUVENILES (GRADE 7-8)
 - E. ADOLESCENTS (GRADE 9-10 / O-LEVELS)
11. ONLY REGISTERED STUDENTS CAN PARTICIPATE IN THE CONTEST.
12. NO CANDIDATE SHALL TAKE OUT OF THE HALL ANY ANSWER BOOK(S) OR PART OF AN ANSWER BOOK, WHETHER USED OR UNUSED, OR OTHER SUPPLIED MATERIAL.
13. IF A PARTICIPANT DOES NOT UNDERSTAND A WORD OR PHRASE ON THE EXAM PAPER, NEITHER EXAMINER NOR INVIGILATOR IS PERMITTED TO ANSWER.
14. FOR INFORMATION ABOUT UPCOMING CONTESTS OR PROVIDING VALUABLE FEEDBACK, PLEASE VISIT WWW.CATSCONTESTS.ORG
15. ANY ACADEMIC MISCONDUCT OR MALPRACTICE MUST BE REPORTED TO INTERNATIONAL CATS CONTESTS AT INFO@CATSCONTESTS.ORG

Q1. Which of the following activities we can do on a computer?

A



B



C



D



Q2. How many objects of the following are machines?



A 1

B 2

C 3

D 4

Q3. How many windows can you see open?



A 1

B 2

C 3

D 4

Q4. What kind of computer is usually kept at one place because it is very heavy?

A



Laptop

B



Desktop

C



Mobile

D



Washing Machine

Q5. Which of the following is a part of a computer?

A Monitor

B Paper

C Bag

D Eraser

Q6. Which place you would most like to visit online?



Jungle



Outer space



Ocean

A Jungle

B Outer space

C Ocean

D All of them

Q7. What type of device is this?



A Input

B Storage

C Output

D None of them

Q8. What is the name of THIS removable storage device?



- A** Compact Disc **B** Flash drive **C** 3-1/2" Floppy disk **D** Hard Drive


Look at the picture given below and answer questions 9 through 12.



Q9. What other letters are in the same row as YUIOP?

- A** QWERT **B** ZXCVBNM **C** ASDFG **D** HJKL

Q10. Which key deletes the text towards left?



Q11. Which is the longest key on the keyboard?

A Enter key

B Tab key

C Space bar

D Backspace key

Q12. Home key in the key board is used to

A Go home

B Go to beginning

C Go out

D Go to end

Q13. What is the proper way to shut down a computer?

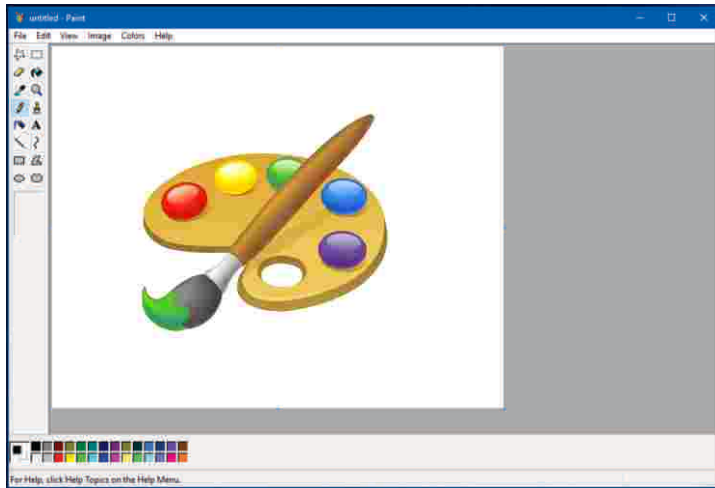
A Click on START button and press shutdown

B Switch of power supply directly

C Remove the power cable

D Any of the above

Look at the picture given below and answer the questions 14 through 17.



Q14. Which of the toolbox will you use to erase the above picture in MS-Paint?

A Free-Form

B Eraser

C Magnifier

D Brush

Q15. Which tool will you use to fill the entire picture or an enclosed shape with color?

A Airbrush

B Fill With Color

C Pencil

D Color box

Q16. Which tool should be used to select an object and move it?

A 

B 

C 

D 

Q17. Which tool would be used to select a portion of the image?



Q18. To zoom in on a section of your picture, you should use the tool marked in red square. What is that tool called?



A Magnifier

B Free-Form

C Brush

D Eraser

Q19. In Ms-Paint, which of the following tools will you use to write "Bad Hare Day" in the picture?

A Pencil

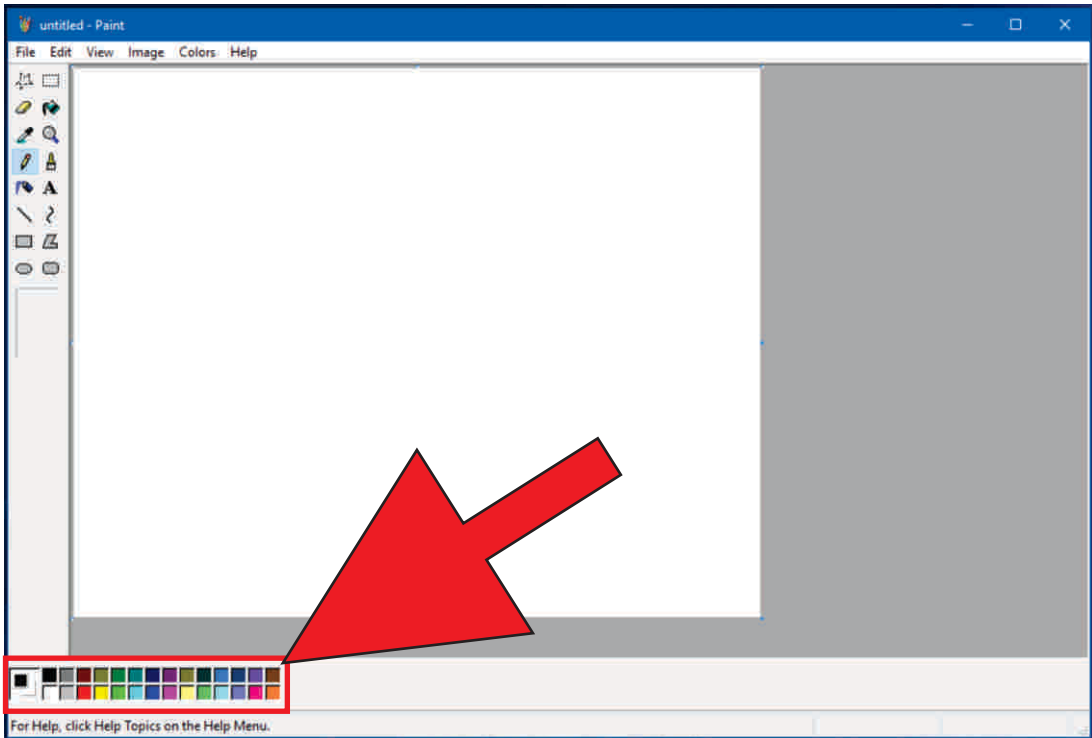
B Text box

C Brush

D Airbrush



Q20. In MS-Paint, what the menu in red square is called:



A Fill with Color

B Color Palette

C Brush

D Airbrush

ICATS English Linguistics Contest 2018 National Toppers

Student Name	Father Name	Grade	School	City
FIMAAAN TASSADDUQUE	ROSHAAN TASSADDUQUE	1	KOHINOOR GRAMMAR SCHOOL	FAISALABAD
MUSA NOOR	NOOR NABI	1	FOUNDATION MONTESSORI SCHOOL	BAHAWALPUR
ZAINA KHAN	MUNAWAR AHMED	1	BEACONHOUSE SCHOOL SYSTEM (BKI F-7/4)	ISLAMABAD
MALIK-AL-ASHTER	KHAN MURTAZA	2	MSB INSTITUTE-SHABBIRABAD	KARACHI
JAWAD ALI	MUHAMMAD ASSAD	2	JOINT STAFF PUBLIC SCHOOL AND COLLEGE CHAKLALA	RAWALPINDI
M. ASAD HUSSAIN	SYED M. ASIF HUSSAIN	2	USMAN PUBLIC SCHOOL SYSTEM (CAMPUS XVI)	KARACHI
HIJAB FATIMA	IRFAN QADIR	3	BEACONHOUSE ALLAMA IQBAL TOWN CAMPUS	LAHORE
ZAINEB NADEEM	NADEEM AFZAL	4	KOHSAR CHILDREN'S ACADEMY	MANSEHRA
MARIA FAISAL	FAISAL SALEEM	5	THE CITY SCHOOL GIRLS BRANCH SATELLITE TOWN	RAWALPINDI
IBRAHIM SALMAN	SALMAN RASOOL	6	LAHORE GRAMMAR SCHOOL FAISAL TOWN BRANCH	LAHORE
KHADIJA IMRAN	IMRAN MAGRANI	7	D. A PUBLIC SCHOOL (O/A LEVELS) SEAVIEW	KARACHI
LAIBA MASOOD	MASOOD ABBAS	8	USMAN PUBLIC SCHOOL SYSTEM (CAMPUS 1)	KARACHI
EMAAN IFTIKHAR	IFTIKHAR AHMAD	9	BEACONHOUSE SCHOOL SYSTEM PTC GIRLS BRANCH	GUJRANWALA
AYESHA NADEEM	MUHAMMAD NADEEM	10	USMAN PUBLIC SCHOOL SYSTEM (CAMPUS VIII)	KARACHI

ICATS Mathematics Contest 2018 National Toppers

Student Name	Father Name	Grade	School	City
AMAN ALI AHMAD	MUHAMMAD WASIM	1	LAHORE GRAMMAR SCHOOL (LANDMARK PROJECT)	LAHORE
MIAN AZAAN MAQBOOL	DANISH MAQBOOL	2	ARMY PUBLIC SCHOOL GARRISON JUNIOR	LAHORE
SHAHEER AFZAL	JAVED AFZAL MARWAT	3	ARMY PUBLIC SCHOOL (TODDLERS ACADEMY)	PESHAWAR
MUHAMMAD AHMED	ASMAT ALI	4	ARMY BURN HALL SCHOOL AND COLLEGE (FOR GIRLS)	ABBOTTABAD
M. MURTAZA ZAIDI	BABER ALI	5	BEACONHOUSE ALLAMA IQBAL TOWN CAMPUS	LAHORE
RAJA SAAD ALI	RAJA AAMIR	6	HITEC SCHOOL & COLLEGE FOR BOYS CANTT	TAXILA
ZAID BIN HAROON	M. HAROON RAFIQUE	7	THE SCIENCE SCHOOL	RAWALPINDI
WALEED AHMED	M. ATIQ	8	KIPS SENIOR BOYS CAMPUS JOHAR TOWN	LAHORE
M. RAYAN ABID	M. ABID MUNEEER	9	SIR SYED SCHOOL AND COLLEGE (CAMPUS IV)	WAH CANTT
IMTIAZ KHAN	DADA KHAN	10	AGA KHAN HIGHER SECONDARY SCHOOL	GILGIT

Compete
if you are the best



INSTRUCTIONS

- This is a generic answer sheet to be used by participants of all grades. Students of Grade 1-2 will fill in circles of first 20 questions, Grade 3-4 will fill in circles of 25 questions and Grade 5-10 will fill in circles of 30 questions.
- Please recheck your Name, Father Name, Grade and School written below, the same would appear at your certificate.
- Use of lead pencil is not allowed.
- Use only Black / Blue ink to fill in the circles.

ICATS IT Contest 2018 Grade 1-2

Choose only ONE of the FOUR proposed answers (A, B, C or D) and fill in the circle with your answer.

Example of correctly filled table of answers.

<input type="radio"/> A	<input type="radio"/> B	<input checked="" type="radio"/> C	<input type="radio"/> D	Correct Filling Answer "C"	<input type="radio"/> A	<input type="radio"/> B	<input checked="" type="radio"/> X	<input type="radio"/> D	wrong filling	<input type="radio"/> A	<input type="radio"/> B	<input checked="" type="radio"/> C	<input type="radio"/> D	wrong filling
<input type="radio"/> A	<input type="radio"/> B	<input checked="" type="radio"/> C	<input type="radio"/> D	wrong filling	<input type="radio"/> A	<input type="radio"/> B	<input checked="" type="radio"/> C	<input type="radio"/> D	wrong filling	<input type="radio"/> A	<input type="radio"/> B	<input checked="" type="radio"/> C	<input type="radio"/> D	wrong filling

Q Answer

- | | | | | |
|----|------------------------------------|------------------------------------|------------------------------------|------------------------------------|
| 1 | <input type="radio"/> A | <input type="radio"/> B | <input checked="" type="radio"/> C | <input type="radio"/> D |
| 2 | <input type="radio"/> A | <input checked="" type="radio"/> B | <input type="radio"/> C | <input type="radio"/> D |
| 3 | <input type="radio"/> A | <input type="radio"/> B | <input checked="" type="radio"/> C | <input type="radio"/> D |
| 4 | <input type="radio"/> A | <input checked="" type="radio"/> B | <input type="radio"/> C | <input type="radio"/> D |
| 5 | <input checked="" type="radio"/> A | <input type="radio"/> B | <input type="radio"/> C | <input type="radio"/> D |
| 6 | <input type="radio"/> A | <input checked="" type="radio"/> B | <input type="radio"/> C | <input type="radio"/> D |
| 7 | <input type="radio"/> A | <input checked="" type="radio"/> B | <input type="radio"/> C | <input type="radio"/> D |
| 8 | <input type="radio"/> A | <input type="radio"/> B | <input checked="" type="radio"/> C | <input type="radio"/> D |
| 9 | <input checked="" type="radio"/> A | <input type="radio"/> B | <input type="radio"/> C | <input type="radio"/> D |
| 10 | <input type="radio"/> A | <input type="radio"/> B | <input type="radio"/> C | <input checked="" type="radio"/> D |

Q Answer

- | | | | | |
|----|------------------------------------|------------------------------------|------------------------------------|------------------------------------|
| 11 | <input type="radio"/> A | <input type="radio"/> B | <input checked="" type="radio"/> C | <input type="radio"/> D |
| 12 | <input type="radio"/> A | <input checked="" type="radio"/> B | <input type="radio"/> C | <input type="radio"/> D |
| 13 | <input checked="" type="radio"/> A | <input type="radio"/> B | <input type="radio"/> C | <input type="radio"/> D |
| 14 | <input type="radio"/> A | <input checked="" type="radio"/> B | <input type="radio"/> C | <input type="radio"/> D |
| 15 | <input type="radio"/> A | <input checked="" type="radio"/> B | <input type="radio"/> C | <input type="radio"/> D |
| 16 | <input type="radio"/> A | <input type="radio"/> B | <input type="radio"/> C | <input checked="" type="radio"/> D |
| 17 | <input checked="" type="radio"/> A | <input type="radio"/> B | <input type="radio"/> C | <input type="radio"/> D |
| 18 | <input checked="" type="radio"/> A | <input type="radio"/> B | <input type="radio"/> C | <input type="radio"/> D |
| 19 | <input type="radio"/> A | <input checked="" type="radio"/> B | <input type="radio"/> C | <input type="radio"/> D |
| 20 | <input type="radio"/> A | <input checked="" type="radio"/> B | <input type="radio"/> C | <input type="radio"/> D |

Q Answer

- | | | | | |
|----|-------------------------|-------------------------|------------------------------------|-------------------------|
| 21 | <input type="radio"/> A | <input type="radio"/> B | <input checked="" type="radio"/> C | <input type="radio"/> D |
| 22 | <input type="radio"/> A | <input type="radio"/> B | <input checked="" type="radio"/> C | <input type="radio"/> D |
| 23 | <input type="radio"/> A | <input type="radio"/> B | <input checked="" type="radio"/> C | <input type="radio"/> D |
| 24 | <input type="radio"/> A | <input type="radio"/> B | <input checked="" type="radio"/> C | <input type="radio"/> D |
| 25 | <input type="radio"/> A | <input type="radio"/> B | <input checked="" type="radio"/> C | <input type="radio"/> D |
| 26 | <input type="radio"/> A | <input type="radio"/> B | <input checked="" type="radio"/> C | <input type="radio"/> D |
| 27 | <input type="radio"/> A | <input type="radio"/> B | <input checked="" type="radio"/> C | <input type="radio"/> D |
| 28 | <input type="radio"/> A | <input type="radio"/> B | <input checked="" type="radio"/> C | <input type="radio"/> D |
| 29 | <input type="radio"/> A | <input type="radio"/> B | <input checked="" type="radio"/> C | <input type="radio"/> D |
| 30 | <input type="radio"/> A | <input type="radio"/> B | <input checked="" type="radio"/> C | <input type="radio"/> D |



INTERNATIONAL CATS CONTESTS

COMPETENCE & APTITUDE TESTING SERVICES

FASTEST GROWING CONTESTS IN PAKISTAN



QUESTION BOOKLET



**ICATS
IT CONTEST
2019**

**GRADE 1 & 2
(TODDLERS)**

Time Allowed: 75 Mins
Maximum Marks: 60

ICATS IT CONTEST 2019 TODDLERS (GRADE 1 & 2)

TIME ALLOWED : 75 MINUTES

MAXIMUM MARKS : 60

TOTAL QUESTIONS : 20 MCQS

INSTRUCTIONS

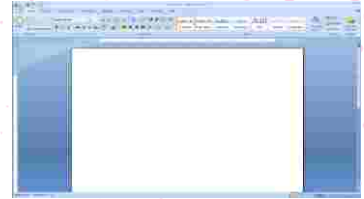
1. DON'T START ATTEMPTING THE PAPER UNTIL INSTRUCTED BY THE INVIGILATORS.
2. INSTRUCTIONS FROM THE EXAMINATION INVIGILATORS MUST BE CARRIED OUT PROMPTLY.
3. CAREFULLY RECHECK YOUR NAME, FATHER NAME, SCHOOL NAME, ADDRESS ETC AT THE BUBBLE SHEET / ANSWER SHEET.
4. RECORD ALL ANSWERS ON THE BUBBLE SHEET ONLY. SELECT BEST ANSWER FROM THE FOUR GIVEN OPTIONS AND MARK ONLY ONE OPTION IN EACH QUESTION.
5. USE BLUE / BLACK INK TO FILL UP THE CIRCLES FOR YOUR ANSWERS ON THE BUBBLE SHEET. USE OF LEAD PENCIL IS NOT ALLOWED.
6. USE OF ANY HELPING MATERIAL INCLUDING CELL PHONES AND ELECTRONIC DEVICES IS STRICTLY PROHIBITED.
7. EVERY CORRECT ANSWER EARNS THREE POINTS. THERE WOULD BE NEGATIVE MARKING. ONE POINT WOULD BE DEDUCTED FOR EVERY INCORRECT ANSWER.
8. CANDIDATES MAY NOT LEAVE THE EXAMINATION ROOM UNESCORTED FOR ANY REASON, AND THIS INCLUDES USING THE WASHROOM.
9. NO MATERIALS OR ELECTRONIC DEVICES SHALL BE BROUGHT INTO THE ROOM.
10. THERE ARE FIVE CATEGORIES OF THE CONTEST AS UNDER:
 - A. TODDLERS (GRADE 1 & 2)
 - B. KIDS (GRADE 3 & 4)
 - C. JUNIORS (GRADE 5 & 6)
 - D. JUVENILES (GRADE 7 & 8)
 - E. ADOLESCENTS (GRADE 9 & 10 / O-LEVELS)
11. ONLY REGISTERED STUDENTS CAN PARTICIPATE IN THE CONTEST.
12. NO CANDIDATE SHALL TAKE OUT OF THE HALL ANY ANSWER BOOK(S) OR PART OF AN ANSWER BOOK, WHETHER USED OR UNUSED, OR OTHER SUPPLIED MATERIAL.
13. IF A PARTICIPANT DOES NOT UNDERSTAND A WORD OR PHRASE ON THE EXAM PAPER, NEITHER EXAMINER NOR INVIGILATOR IS PERMITTED TO ANSWER.
14. FOR INFORMATION ABOUT UPCOMING CONTESTS OR PROVIDING VALUABLE FEEDBACK, PLEASE VISIT WWW.CATSCONTESTS.ORG
15. ANY ACADEMIC MISCONDUCT OR MALPRACTICE MUST BE REPORTED TO INTERNATIONAL CATS CONTESTS AT INFO@CATSCONTESTS.ORG

Q1. Identify which of the following is software:

A



C



B



D



Q2. _____ is now used by many people to represent all paper documents, including letters, books, print advertisements, catalogs, memos, order forms, and so on.

A | Hardware

B | Software

C | Hard Copy

D | Soft Copy

Q3. As thousands of files are stored inside a computer, it is very important to keep them organized. I am an object that can hold multiple files or documents. On the computer screen, most often I look like a yellow or blue paper file folder. I keep files organized by grouping them together. What am I?

A | A file

B | A directory

C | A hard drive

D | A print out

Q4. Which of the following moves the pointer to another location on-screen?

A | Pressing the arrow keys on the keyboard.

B | Moving the mouse until the pointer points to that spot.

C | Moving the mouse until the pointer points to that spot and clicking the left mouse button.

D | Moving the mouse until the pointer points to that spot and clicking the right mouse button.

Q5. I am the brain of a computer. My picture is given below. Who am I?



A | CD ROM

B | Hard Drive

C | Central Processing Unit

D | RAM

Q6. Generally speaking, which of the following storage devices can hold the most information?

A | A hard disk

B | A Zip disk

C | A CD-ROM

D | A DVD

Q7. I am a storage device but I can store information TEMPORARILY. Whenever you work with a file on your computer, you're using me. And the data in that file is temporarily stored in me for processing as long as the computer has power. Can you recognize me? Who am I?

A



C



B



D



Q8. Which of the following is a text-based operating system?

A | Windows 95

B | Windows 2000

C | Windows CE

D | MS-DOS

Q9. In the mouse shown below, which button will you press for right-click?

A | Red button

C | Yellow button

B | Blue button

D | Both, red and blue buttons



Q10. Can you identify the place / activity of the following where computer CANNOT be used?

A



C



B



D



Q11. The equivalent of a left mouse click on a touch-screen is...?

A | Touch the screen and hold the finger on.

C | Tap the item twice on the screen

B | Tap the screen and release.

D | Slide the finger on the screen

Q12. Which of the following is like a music file:

A



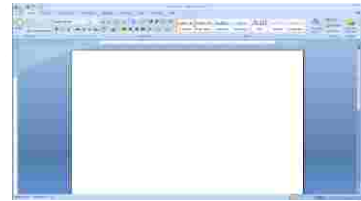
C



B



D



Q13. Maya's teacher brought some new software, which is shown below. Where in the computer will she put this in order to run the new software?



A | Hard drive

B | CD-ROM drive

C | Memory

D | Cursor

Q14. Ali wants to save his MS Word document. Which shortcut keys he should use?



Q15. The bar of MS Word document shown in the image below is called:




A | Status bar

B | Title bar

C | Tool bar

D | Scroll bar



Q16. Minimizing a window is helpful if you are not using the program temporarily, but plans to return to it soon. To maximize a window, which button of the following will you simply click on?



Q17. How can you select more than one icon at a time?

- A** | Select the first, then hold CTRL whilst selecting the rest
- B** | Right click on them
- C** | Double click on them
- D** | Use the TAB button

Q18. The following icon will enable you to:



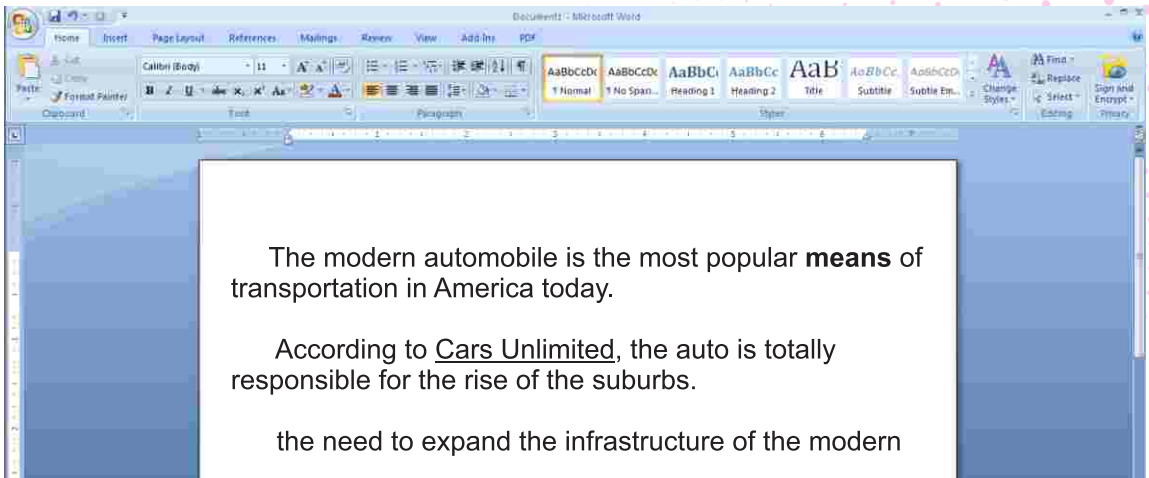
- A** | Copy text
- B** | Paste text
- C** | Create a folder
- D** | Open new document

Q19. The following icon will enable you to:



- A** | Insert bullets
- B** | Change case
- C** | Increase font size
- D** | Decrease font size

Q20. See the following MS Word document made by Sara and answer the question given below.



Which button did Sara use to make the style change to the word “means” in the first paragraph?

A



C



B



D



ICATS English Linguistics Contest 2019 National Toppers

Student Name	Father Name	Grade	School	City
AMATULLAH	ADNAN	1	MSB EDUCATIONAL INSTITUTE	KARACHI
MUHAMMAD MOHSIN	WAHEED SHEHZAD	1	RANGERS PUBLIC SCHOOL FOR BOYS	LAHORE
ZAIN-UL-ABIDIN	INAM-ULLAH	2	ARMY PUBLIC SCHOOL GARRISON JUNIOR	LAHORE
MUHAMMAD ASIS JAVED	MUHAMMAD SHAHEER JAVED	3	THE CITY SCHOOL CHASHMA BRANCH	MIANWALI
AYESHA SIDDIQUI	M. ASHRAF UL KABIR SIDDIQUI	4	THE CITY SCHOOL GULSHAN JUNIOR CAMPUS	KARACHI
AYESHA FAISAL	FAISAL EHSAN	5	LAHORE GRAMMAR SCHOOL LANDMARK PROJECT	LAHORE
ASAD IMRAN	M. IMRAN	6	THE CITY SCHOOL CANTT CAMPUS II	QUETTA
MANAAL TARIQ	DR. TARIQ MEHMOOD	7	THE CITY SCHOOL GIRLS CAMPUS	SIALKOT
FIZZA RIZVI	ALI ABBAS RIZVI	8	HABIB GIRLS SCHOOL	KARACHI
LAMISAH BEHRAM KHAN	BEHRAM BASHIR KHAN	9	LAHORE GRAMMAR SCHOOL	ISLAMABAD
FAIZ UL HASSAN GILANI	GHULAM UL HUSSAIN GILANI	10	THE CITY SCHOOL TOWN SENIOR SECTION	PESHAWAR

ICATS Mathematics Contest 2019 National Toppers

Student Name	Father Name	Grade	School	City
HIBA MALIK	BILAL MALIK	1	KOHSAR CHILDREN'S ACADEMY	MANSEHRA
DURYAB ZAHRA	MUHAMMAD RASHID	1	BEACONHOUSE HAFIZABAD	HAFIZABAD
ABDUL RASHEED	ABDUL WAHEED	2	ARMY PUBLIC SHOOOL & COLLEGE SYSTEM SADDAR CAMPUS	KARACHI
BURHANUDDIN	M. ALI ASGHER SAMIWALA	2	MSB EDUCATIONAL INSTITUTE	KARACHI
M. HUMMAS	M. SHAKIL	3	DEFENCE HOUSING AUTHORITY COLLEGE AND SCHOOL SYSTEM	KARACHI
EHAN QURESHI	ASSADULLAH QURESHI	4	FFC GRAMMAR SCHOOL AND COLLEGE	MIRPUR MATHELO
MAHAD ABID	M. HARIS UMER	5	THE CITY SCHOOL CHENAB CAMPUS	FAISALABAD
UROOJ AJMAL	AJMAL IBRAHIM	6	KIPS SCHOOL	LAHORE
MUHAMMAD SALAMAT	SADAT MEHMOOD	7	GARRISON ACADEMY TUFAIL SHAHEED CAMPUS (SENIOR)	LAHORE
ABDULLAH JUNAID KHAN	ABDUL RAUF	8	THE SCIENCE SCHOOL	ISLAMABAD
SAAD ALI HASSAN	ABDUL HAYEE	8	THE SCIENCE SCHOOL	RAWALPINDI
DANIYAL KALEEM SHEIKH	MUHAMMAD KALEEM	9	ROOTS IVY INTERNATIONAL SCHOOL IB CAMPUS	RAWALPINDI
AHMED ALI	AUN ALI	10	MSB EDUCATIONAL INSTITUTE	KARACHI

COMPETE if you are
the **BEST**



INSTRUCTIONS

- This is a generic answer sheet to be used by participants of all grades. Students of Grade 1-2 will fill in circles of first 20 questions, Grade 3-4 will fill in circles of 25 questions and Grade 5-10 will fill in circles of 30 questions.
- Please recheck your Name, Father Name, Grade and School written below, the same would appear at your certificate.
- Use of lead pencil is not allowed.
- Use only Black / Blue ink to fill in the circles.

ICATS IT Contest 2019 Grade 1-2

Choose only ONE of the FOUR proposed answers (A, B, C or D) and fill in the circle with your answer.

Example of correctly filled table of answers.



Q. No.	Answer	Q. No.	Answer	Q. No.	Answer
1	(A) (B) ● (D)	11	(A) ● (C) (D)	21	(A) (B) (C) (D)
2	(A) (B) ● (D)	12	(A) (B) ● (D)	22	(A) (B) (C) (D)
3	(A) ● (C) (D)	13	(A) ● (C) (D)	23	(A) (B) (C) (D)
4	(A) ● (C) (D)	14	● (B) (C) (D)	24	(A) (B) (C) (D)
5	(A) (B) ● (D)	15	(A) ● (C) (D)	25	(A) (B) (C) (D)
6	● (B) (C) (D)	16	(A) ● (C) (D)	26	(A) (B) (C) (D)
7	(A) ● (C) (D)	17	● (B) (C) (D)	27	(A) (B) (C) (D)
8	(A) (B) (C) ●	18	(A) ● (C) (D)	28	(A) (B) (C) (D)
9	● (B) (C) (D)	19	(A) (B) ● (D)	29	(A) (B) (C) (D)
10	(A) ● (C) (D)	20	(A) (B) ● (D)	30	(A) (B) (C) (D)